
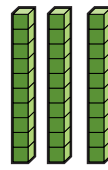


- 1) Find 10 more and 10 less than the number shown.

Use base ten blocks to help you.

10 more = _____

10 less = _____



- 2) Fill in the table below. The first row has been done for you.


Number	1 more	10 more	100 more
146	147	156	246
573			
			912
604			
	476		
		803	

- 1) True or false?

Statement	True or False?
a) 10 more than 462 > 100 less than 556	
b) 1 less than 750 < 100 more than 634	
c) 100 less than 643 = 10 more than 533	



- 2) Kareem starts with a number.
He puts it through the function machines.



He ends up with 676.

- a) What number did he start with? _____
- b) If Kareem had started off with 676, what number would he have ended up with? _____



1) Macey has added either 1, 10 or 100 to a number. She has made 702.

a) What could her original number have been? Find all the possibilities.

b) Explain how you know.

2) Write down all the different ways that you can make 673 by either adding or subtracting 1, 10 or 100 from other numbers.

